

PB PAGEZ EXAMINATION

END OF THIRD TERM EXAMINATION, NOVEMBER, 2021


SUBJECT: ENGLISH – BASIC ONE (1)

Name..... Date.....

SECTION A


Choose the correct answer in the following below

1. Identify the shape below



- a. Square
- b. Triangle
- c. Rectangle

2. The shape below is a?.....




- a. square
- b. cylinder
- c. oval

3. The Holy bible is in a form of which shape?

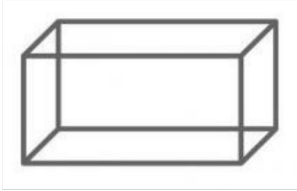
- a. rectangle
- b. oval
- c. triangle

4. The cylinder below has how many faces?



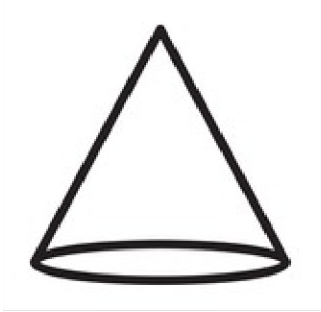
- a. 3
- b. 4
- c. 5

5. The cuboid below has how many faces?



- a. 5
- b. 6
- c. 3

6. The figure below is called?.....



- a. hat
- b. circle
- c. cone

7. The figure above has how many faces?

- a. 3
- b. 4
- c. 2

Buy **FULL VERSION** with **MARKING SCHEME**

Click here >> [WHATSAPP US](#)

You can **Download, Edit & Print**

SCHEME OF LEARNING USED >> [Download Here](#)