

PB PAGEZ EXAMINATION

END OF THIRD TERM EXAMINATION, NOVEMBER, 2021

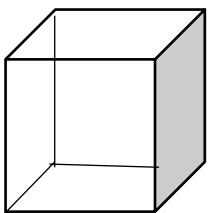
SUBJECT: MATHS – BASIC TWO (2)

Name..... Date.....

SECTION A

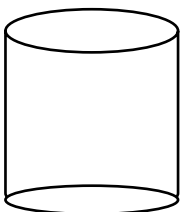
Choose the correct answer in the following below

1. What is the rule for the pattern 75, 65, 55, 45, 35?
A. $- 10$
B. $- 20$
C. 10
2. What is the next pattern for the numbers 16, 18, 20, 22,?
A. 26
B. 30
C. 24
3. Find the error in this increasing pattern 4, 6, 8, 10, 11, 12, 14. The error in this increasing pattern is.....
A. 14
B. 11
C. 10
D.
4. The cube below has how many faces?



- A. 8
- B. 6
- C. 9

5. The cylinder below has how many faces?

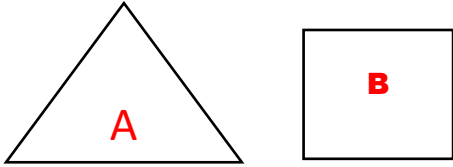


- A. 3
- B. 2
- C. 5

6. The length of a ruler when on a table is 4 cm, when it falls from the table, the length of the ruler will be.....

- A. 4cm
- B. 6cm
- C. 7cm

6. The shape marked A in the figure below is a.....



- A. Square
- B. Rectangle
- C. triangle

7. A circle has how many faces?


- A. 3
- B. 4
- C. 1

8. What says the time?



- A. 3 o'clock
- B. 2 o'clock
- C. 11 o'clock

9. Which star is the biggest?



Buy **FULL VERSION** with **MARKING SCHEME**

Click here >> [WHATSAPP US](#)

You can **Download, Edit & Print**

SCHEME OF LEARNING USED >> [Download Here](#)