

PB PAGEZ EXAMINATION

END OF THIRD TERM EXAMINATION, NOVEMBER, 2021

SUBJECT: CREATIVE ARTS – BASIC THREE (3)

Name..... Date.....

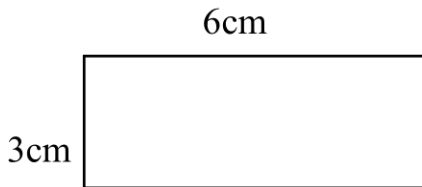
SECTION A

Choose the correct answer in the following below

1. The meter equivalent of 100cm is

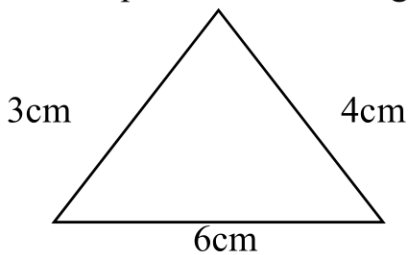
- a. 1m
- b. 2m
- c. 3m

2. What is the length of the rectangle below?



- a. 6cm
- b. 3cm
- c. None

3. Find the perimeter of the figure below.



- a. 12cm
- b. 18cm
- c. 13cm

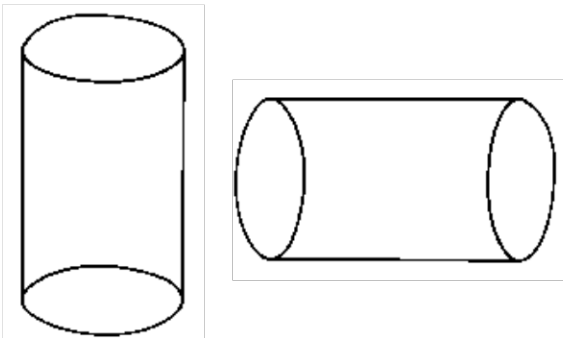
4. The length of a rectangle is 5cm and the width is 2cm. Find the perimeter of the rectangle.

- a. 10 cm
- b. 7 cm
- c. 14 cm

5. The length of a square drawn on a board is 4cm. Find the perimeter of the square.

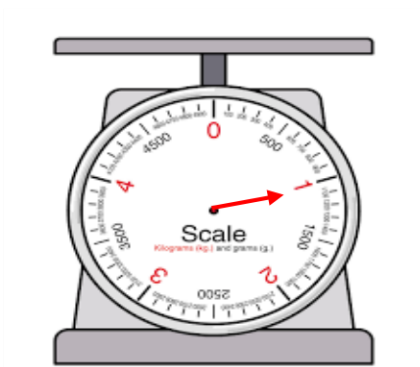
- a. 16cm
- b. 4cm
- c. 44cm

6. The shape below has the same length.



- a. True
- b. False
- c. None

Use the diagram below to answer the questions that follows



7. The weight of the flat metal on the weighing scale is?

- a. 2kg
- b. 1kg
- c. 3kg

Buy **FULL VERSION** with **MARKING SCHEME**

Click here >> [WHATSAPP US](#)

You can **Download, Edit & Print**

SCHEME OF LEARNING USED >> [Download Here](#)